

Question Paper

Name of the Post :	Stenographer English
Date of the Examination :	26th Dec 2022 Shift 2
Duration :	60 Minutes
Total Marks :	100

**Question Number : 1 Question Id : 750782830 Is Question Mandatory : No Calculator : None Response Time : N.A Think Time : N.A
Minimum Instruction Time : 0
Wrong Marks : 0.25**

Choose the word/s having meaning similar to that of IMPROMPTU.

- a. Extempore
- b. Off-hand
- c. Unpremeditated

Options :

- 1. a only
- 2. a and b only
- 3. b and c only
- 4. a, b and c

**Question Number : 2 Question Id : 750782831 Is Question Mandatory : No Calculator : None Response Time : N.A Think Time : N.A
Minimum Instruction Time : 0
Wrong Marks : 0.25**

Choose one word that is most closely opposite in meaning to the capitalized word.

DEplete

Options :

- 1. diminish
- 2. replenish
- 3. stupendous

4. rubbish

Question Number : 3 Question Id : 750782832 Is Question Mandatory : No Calculator : None Response Time : N.A Think Time : N.A
Minimum Instruction Time : 0

Wrong Marks : 0.25

Choose the word/s opposite in meaning to the underlined word.

Senior government figures must have acquiesced in the cover-up.

- a. Resisted
- b. Confronted
- c. Adjusted

Options :

- 1. a only
- 2. a and b only
- 3. a and c only
- 4. a, b and c

Question Number : 4 Question Id : 750782833 Is Question Mandatory : No Calculator : None Response Time : N.A Think Time : N.A
Minimum Instruction Time : 0

Wrong Marks : 0.25

Which one of the following words given in the options is the correct meaning of the underlined phrase in the given sentence ?

“He will steer clear the criticism of his opponents”

Options :

- 1. to resemble
- 2. to feel proud
- 3. to become prey
- 4. to avoid

Question Number : 5 Question Id : 750782834 Is Question Mandatory : No Calculator : None Response Time : N.A Think Time : N.A
Minimum Instruction Time : 0

Wrong Marks : 0.25

Choose the word/s that is/are correctly spelt.

- a. OMNISCIENT
- b. OMENOUS
- c. OPULANT

Options :

- 1. a only
- 2. a and b only
- 3. b and c only
- 4. a, b and c

Question Number : 6 Question Id : 750782835 Is Question Mandatory : No Calculator : None Response Time : N.A Think Time : N.A Minimum Instruction Time : 0

Wrong Marks : 0.25

Having a sixth finger on one hand is _____condition.

Choose the appropriate option from the following to fill in the blank in above sentence.

Options :

- 1. aberrant
- 2. abhorrent
- 3. abbreviate
- 4. abdicate

Question Number : 7 Question Id : 750782836 Is Question Mandatory : No Calculator : None Response Time : N.A Think Time : N.A Minimum Instruction Time : 0

Wrong Marks : 0.25

Which word can replace the underlined word to convey the same meaning ?

We had to wait almost an hour before he condescended to see us.

Options :

- 1. Ascended
- 2. Reigned
- 3. Deigned
- 4. Feigned

**Question Number : 8 Question Id : 750782837 Is Question Mandatory : No Calculator : None Response Time : N.A Think Time : N.A
Minimum Instruction Time : 0
Wrong Marks : 0.25**

Identify the incorrect sentence from the following.

Options :

1. He is a vain fellow who is always humble and modest.
2. The vane shows us the direction of the wind.
3. Veins carry the blood to the heart.
4. The moon is now on the wane.

**Question Number : 9 Question Id : 750782838 Is Question Mandatory : No Calculator : None Response Time : N.A Think Time : N.A
Minimum Instruction Time : 0
Wrong Marks : 0.25**

Identify complex sentence/s.

- a. The girl is very talented.
- b. What you told me is true.
- c. I saw him while he was coming out of his office.

Options :

1. a only
2. b and c only
3. a and c only
4. a, b and c

**Question Number : 10 Question Id : 750782839 Is Question Mandatory : No Calculator : None Response Time : N.A Think Time : N.A
Minimum Instruction Time : 0
Wrong Marks : 0.25**

Combine the two sentences to form a complex sentence.

‘A poet may easily be pardoned for reasoning ill. He can not be pardoned for describing ill.’

Choose the appropriate complex sentence from the following options.

- a. Though a poet can not be pardoned for reasoning ill, he can not be pardoned for describing ill.
- b. Though a poet can be pardoned for describing ill, he can not be pardoned for reasoning ill.
- c. Though a poet can be pardoned for describing ill, he can be pardoned for reasoning ill.
- d. Though a poet can not be pardoned for describing ill, he can be pardoned for reasoning ill.

Options :

1. a and c only
2. b only
3. c only
4. d only

Question Number : 11 Question Id : 750782840 Is Question Mandatory : No Calculator : None Response Time : N.A Think Time : N.A
Minimum Instruction Time : 0

Wrong Marks : 0.25

Match the following :

- | | |
|-----------------------------|------------------------------------|
| a. When I reached his house | I. the enemy laid down their arms. |
| b. I gave him money | II. she rang up her brother. |
| c. On reaching the airport | III. because he was stranded. |
| d. When defeated | IV. he was writing a letter. |

Options :

- | | | | | |
|----|----------|----------|----------|----------|
| | a | b | c | d |
| 1. | I | II | III | IV |
| | a | b | c | d |
| 2. | IV | II | III | I |
| | a | b | c | d |
| 3. | I | IV | II | III |

4.

a	b	c	d
IV	III	II	I

Question Number : 12 Question Id : 750782841 Is Question Mandatory : No Calculator : None Response Time : N.A Think Time : N.A
Minimum Instruction Time : 0

Wrong Marks : 0.25

Has anybody shown you what to do ?
Change the above sentence into passive voice.

Options :

1. Has anybody been shown you what to do ?
2. Have you been shown what to do ?
3. Haven't you be shown what to do ?
4. What to do have been shown by you ?

Question Number : 13 Question Id : 750782842 Is Question Mandatory : No Calculator : None Response Time : N.A Think Time : N.A
Minimum Instruction Time : 0

Wrong Marks : 0.25

While joining the following pairs of sentences through 'AND', which items can be omitted ?

- a. Meera opened the fridge. Meera put the milk in it.
- b. He chained the dog. He tied it to the door.
- c. Rita has opened the room. Rita has cleaned it.

Options :

1. Meera, he tied, Rita
2. Meera, he, Rita has
3. Meera put, he, Rita has
4. Meera put, he, Rita

Question Number : 14 Question Id : 750782843 Is Question Mandatory : No Calculator : None Response Time : N.A Think Time : N.A
Minimum Instruction Time : 0

Wrong Marks : 0.25

Identify the incorrect sentence/sentences from the following options.

- a. He lied to me.
- b. If you are tired, go and lay down.
- c. The sick person lay on the bed.
- d. Lay the injured person on this rug.

Options :

1. a only
2. b only
3. a and d only
4. c and d only

Question Number : 15 Question Id : 750782844 Is Question Mandatory : No Calculator : None Response Time : N.A Think Time : N.A Minimum Instruction Time : 0

Wrong Marks : 0.25

Choose the best equivalent sentence.

It's difficult to play a saxophone.

Options :

1. A saxophone is difficult to play.
2. Difficult it is to play a saxophone.
3. To playing a saxophone is difficult.
4. A saxophone is difficult for playing.

Question Number : 16 Question Id : 750782845 Is Question Mandatory : No Calculator : None Response Time : N.A Think Time : N.A Minimum Instruction Time : 0

Wrong Marks : 0.25

How you manage your class is a great lesson to me.

Identify the kind of clause which is the underlined part of a sentence.

Options :

1. an adjective clause
2. a noun clause
3. an adverb clause

4. none of it

Question Number : 17 Question Id : 750782846 Is Question Mandatory : No Calculator : None Response Time : N.A Think Time : N.A
Minimum Instruction Time : 0

Wrong Marks : 0.25

Choose the incorrect sentence/s.

- a. He asks where is she going.
- b. The stranger asked the policeman where was the bus station.
- c. I told to him the happy news.

Options :

- 1. a only
- 2. b and c only
- 3. a and c only
- 4. a, b and c

Question Number : 18 Question Id : 750782847 Is Question Mandatory : No Calculator : None Response Time : N.A Think Time : N.A
Minimum Instruction Time : 0

Wrong Marks : 0.25

Fill in the blanks.

- a. Well, we need a menu first, _____ ?
- b. You're now around here, _____ ?
- c. She's a good-looking girl, _____ ?

Options :

- 1. don't we, aren't you, isn't she
- 2. doesn't, aren't you, isn't she
- 3. doesn't it, isn't it, isn't she
- 4. don't we, is it, isn't she

Question Number : 19 Question Id : 750782848 Is Question Mandatory : No Calculator : None Response Time : N.A Think Time : N.A
Minimum Instruction Time : 0

Wrong Marks : 0.25

Choose the correct sentence/s.

- a. What a nonsense to have a picnic in such a bad weather !
- b. He hasn't a beautiful furniture in his house.
- c. The news is good today.

Options :

- 1. c only
- 2. b and c only
- 3. a and c only
- 4. a, b and c

Question Number : 20 Question Id : 750782849 Is Question Mandatory : No Calculator : None Response Time : N.A Think Time : N.A Minimum Instruction Time : 0

Wrong Marks : 0.25

Identify the correct sentence/sentences from the following options.

- a. Working in the field, a snake bit him.
- b. Working in the field, he was bitten by a snake.
- c. While he was working in the field, a snake bit him.
- d. Being worked in the field, a snake bit him.

Options :

- 1. a only
- 2. b and c only
- 3. c only
- 4. d only

Question Number : 21 Question Id : 750782850 Is Question Mandatory : No Calculator : None Response Time : N.A Think Time : N.A Minimum Instruction Time : 0

Wrong Marks : 0.25

Fill in the blank with appropriate modal auxiliary from the following options :

I am feeling sick. I _____ so much chocolate.

Options :

- 1. should eat
- 2. should have eaten

3. shouldn't eat
4. should not have eaten

Question Number : 22 Question Id : 750782851 Is Question Mandatory : No Calculator : None Response Time : N.A Think Time : N.A Minimum Instruction Time : 0

Wrong Marks : 0.25

Fill in the blanks :

- a. Both _____ anxious parents sat up half the night.
- b. She drives her car at sixty miles _____ hour.
- c. He paid twenty-five paise _____ seer for these apples.

Options :

1. the, a, a
2. the, an, a
3. an, an, a
4. the, an, an

Question Number : 23 Question Id : 750782852 Is Question Mandatory : No Calculator : None Response Time : N.A Think Time : N.A Minimum Instruction Time : 0

Wrong Marks : 0.25

The fertile land of India had been fascinating many foreigners since its formation.
The mood in this sentence is

Options :

1. Subjunctive
2. Imperative
3. Indicative
4. None of these

Question Number : 24 Question Id : 750782853 Is Question Mandatory : No Calculator : None Response Time : N.A Think Time : N.A Minimum Instruction Time : 0

Wrong Marks : 0.25

Choose the correct sentence/s.

- a. Students must either wear hats or caps.
- b. He is an ascetic in neither theory nor practice.
- c. This will not only interest children but also grown-ups.

Options :

1. b only
2. a and b only
3. b and c only
4. a, b and c

Question Number : 25 Question Id : 750782854 Is Question Mandatory : No Calculator : None Response Time : N.A Think Time : N.A
Minimum Instruction Time : 0

Wrong Marks : 0.25

‘After the teacher chose groups, John and Sara were selected as partners for a project, yet Sara did most of her work.’ Identify the type of sentence from the following options :

Options :

1. Compound-complex
2. Simple
3. Compound
4. Complex

Question Number : 26 Question Id : 750782855 Is Question Mandatory : No Calculator : None Response Time : N.A Think Time : N.A
Minimum Instruction Time : 0

Wrong Marks : 0.25

Fill in the blank.

He belongs to higher _____ of the civil service.

Options :

1. ecclesiastic
2. camouflage
3. echelons
4. ecclesiastical

Question Number : 27 Question Id : 750782856 Is Question Mandatory : No Calculator : None Response Time : N.A Think Time : N.A
Minimum Instruction Time : 0
Wrong Marks : 0.25

Give the meaning of the phrase 'to cast a slur on'

Options :

1. to walk wisely to finish
2. to make unimportant
3. to bewitch
4. to blame

Question Number : 28 Question Id : 750782857 Is Question Mandatory : No Calculator : None Response Time : N.A Think Time : N.A
Minimum Instruction Time : 0
Wrong Marks : 0.25

Match the following :

- | | |
|---------------------------|----------------------------------|
| a. At the drop of a hat | I. Transfer the responsibility |
| b. I'll eat my hat | II. Extremely unlikely to happen |
| c. Talk through one's hat | III. Without delay |
| d. Pass the buck | IV. Talk nonsense |

Options :

- | | | | | |
|----|----------|----------|----------|----------|
| | a | b | c | d |
| 1. | I | III | IV | II |

- | | | | | |
|----|----------|----------|----------|----------|
| | a | b | c | d |
| 2. | III | II | IV | I |

- | | | | | |
|----|----------|----------|----------|----------|
| | a | b | c | d |
| 3. | III | IV | I | II |

- | | | | | |
|----|----------|----------|----------|----------|
| | a | b | c | d |
| 4. | IV | II | III | I |

Question Number : 29 Question Id : 750782858 Is Question Mandatory : No Calculator : None Response Time : N.A Think Time : N.A
Minimum Instruction Time : 0
Wrong Marks : 0.25

Choose the best meaning of underlined words in the given sentence.

I had lunch with Clive and Peter and they talked shop the whole time.

Options :

1. Discussed items to be kept in the shop
2. Discussed profits from existing shop
3. Discussed opening a new shop
4. Discussed work related matters

Question Number : 30 Question Id : 750782859 Is Question Mandatory : No Calculator : None Response Time : N.A Think Time : N.A
Minimum Instruction Time : 0

Wrong Marks : 0.25

Choose the best option to fill in the blank.

Her birthday is _____ soon.

Options :

1. coming over
2. coming up
3. coming down
4. coming around

Question Number : 31 Question Id : 750782860 Is Question Mandatory : No Calculator : None Response Time : N.A Think Time : N.A
Minimum Instruction Time : 0

Wrong Marks : 0.25

‘Do not run down your superiors in office.’

Choose the option which explains the correct meaning of the underlined part in the given sentence.

- a. to overcome
- b. to surpass in bad action
- c. to tolerate
- d. to condemn

Options :

1. only a and d
2. only b
3. only c
4. only d

Question Number : 32 Question Id : 750782861 Is Question Mandatory : No Calculator : None Response Time : N.A Think Time : N.A
Minimum Instruction Time : 0
Wrong Marks : 0.25

Find out whether the given sentence is correct or incorrect :

“Seldom had the little town seen a more costlier funeral.”

Options :

1. Correct
2. Incorrect
3. Partially correct
4. None of the above

Question Number : 33 Question Id : 750782862 Is Question Mandatory : No Calculator : None Response Time : N.A Think Time : N.A
Minimum Instruction Time : 0
Wrong Marks : 0.25

Fill in the blank.

The Church needs to find new ways of _____ young people.

Options :

1. reaching with to
2. reaching out to
3. reaching in to
4. reaching over to

Question Number : 34 Question Id : 750782863 Is Question Mandatory : No Calculator : None Response Time : N.A Think Time : N.A
Minimum Instruction Time : 0
Wrong Marks : 0.25

Fill in the blank.

His teachers seem to have _____ him.

Options :

1. given up in
2. given up at
3. given up to

4. given up on

Question Number : 35 Question Id : 750782864 Is Question Mandatory : No Calculator : None Response Time : N.A Think Time : N.A
Minimum Instruction Time : 0

Wrong Marks : 0.25

Choose the best meaning of underlined words in the given sentence.

He was like a bull in a China shop at the party.

Options :

1. a person looking for a prey
2. a person not interested in anything
3. a person interested in arts
4. a person behaving in awkward way

Question Number : 36 Question Id : 750782865 Is Question Mandatory : No Calculator : None Response Time : N.A Think Time : N.A
Minimum Instruction Time : 0

Wrong Marks : 0.25

Match the following :

A

B

- | | |
|-----------------|-------------------|
| i. Euphemism | a. Secretive |
| ii. Nostalgia | b. Temporary |
| iii. Ephemeral | c. Circumlocution |
| iv. Clandestine | d. Homesickness |

Options :

1. i – a, ii – b, iii – c, iv – d
2. i – c, ii – d, iii – b, iv – a
3. i – c, ii – a, iii – d, iv – b
4. i – b, ii – c, iii – a, iv – d

Question Number : 37 Question Id : 750782866 Is Question Mandatory : No Calculator : None Response Time : N.A Think Time : N.A
Minimum Instruction Time : 0

Wrong Marks : 0.25

Identify the grammatically correct sentence.

Options :

1. I intend to sit in the garden and write letters.
2. I intend to sit in the garden and to write letters.
3. I intend to sit in the garden and wrote letters.
4. I intend to sit in the garden and had written letters.

Question Number : 38 Question Id : 750782867 Is Question Mandatory : No Calculator : None Response Time : N.A Think Time : N.A
Minimum Instruction Time : 0

Wrong Marks : 0.25

Choose the correct question tag.

'Raghu was unable to attend the interview, _____'

Options :

1. was he ?
2. was he not ?
3. wouldn't he ?
4. wasn't he ?

Question Number : 39 Question Id : 750782868 Is Question Mandatory : No Calculator : None Response Time : N.A Think Time : N.A
Minimum Instruction Time : 0

Wrong Marks : 0.25

Give antonym for the underlined word :

'He was an indolent boy who used to spend his days looking at the sky.'

Options :

1. lazy
2. active
3. passive
4. slothful

Question Number : 40 Question Id : 750782869 Is Question Mandatory : No Calculator : None Response Time : N.A Think Time : N.A
Minimum Instruction Time : 0

Wrong Marks : 0.25

'Hoard' and 'Horde' are examples of

Options :

1. Hyponym
2. Synonym
3. Homonym
4. Antonym

Question Number : 41 Question Id : 750782870 Is Question Mandatory : No Calculator : None Response Time : N.A Think Time : N.A Minimum Instruction Time : 0 Wrong Marks : 0.25

Fill in the blank with appropriate linking word.

'He was extremely tired _____ the noise kept him awake.'

Options :

1. but
2. when
3. that
4. and

Question Number : 42 Question Id : 750782871 Is Question Mandatory : No Calculator : None Response Time : N.A Think Time : N.A Minimum Instruction Time : 0 Wrong Marks : 0.25

Choose the correct alternative for the following sentence :

'You are more intelligent than I am.'

Options :

1. You are not less intelligent than I am.
2. I am not more intelligent than you are.
3. I am not so intelligent as you are.
4. You are the most intelligent person.

Question Number : 43 Question Id : 750782872 Is Question Mandatory : No Calculator : None Response Time : N.A Think Time : N.A Minimum Instruction Time : 0 Wrong Marks : 0.25

'If I were the Prime-Minister I would eradicate poverty.'

Identify the type of the mood expressed in the above sentence.

Options :

1. imperative
2. assertive
3. subjunctive
4. indicative

Question Number : 44 Question Id : 750782873 Is Question Mandatory : No Calculator : None Response Time : N.A Think Time : N.A Minimum Instruction Time : 0

Wrong Marks : 0.25

Change the verb 'explore' into a noun by using the appropriate suffix.

Options :

1. ___ ity
2. ___ ation
3. ___ ness
4. ___ ism

Question Number : 45 Question Id : 750782874 Is Question Mandatory : No Calculator : None Response Time : N.A Think Time : N.A Minimum Instruction Time : 0

Wrong Marks : 0.25

Fill in the blank with correct word from the alternatives given below.

Uncle Bob took David and _____ to the circus.

Options :

1. I
2. Me
3. My
4. None of these

Question Numbers : (46 to 50)

(Direction : Q. No. 46 – 50)

Read the passage given below carefully and answer the questions based on it given below :

My father would stitch our cloths at Munshi tailors. I had no freedom in asking Munshiji to stitch according to the latest fashions. My father would give him special instructions to stitch loose shirts and pants like his own. He was careful to see that all the cloths that he had purchased was utilized properly and Munshiji could not pilfer even an inch of cloth from it. This was the reason why I looked old fashioned and shabby. Nurya looked at my shirt one evening and asked, “Where do you stitch them ?” “At Munshi tailors,” I said. “There is a lot of sag in it,” he said and asked me to take out the shirt for some time. I took out my shirt and sat in Swaroop Shet’s shop on my vest, while Nurya got himself busy altering it. He was doing it with great care and skill. He also removed the dull white plastic buttons and replaced them with glossy black nylon ones. “Now try it,” he said. Wow! It was so cute. I looked quite trim and smart in it. “How much ?” I had asked him. “Bas kya ? Dosti me paisa nahi chalta,” money matters are not to be brought in friendship, he said. I was happy I didn’t have to pay anything. We had no provision of pocket money. My father was against the idea of giving money to children. “Tell me whatever you need and I’ll bring it to you, but not money,” he’d say. “Paisa bachhon ko bigad deta hai,” money spoils children, he would tell my mother.

Now Nurya became my friend. Slowly he altered all my pants and shirts. My friends were surprised to see the change. One day Nurya offered me to have ‘garma garm Bhajiyas’, in Udhav Shet’s hotel. I hesitated but he insisted on my accompanying him. I was tempted, both, by the ‘bhajiyas’ as well as his affection. I could not say no to such a sincere friend who had brought me to the world of latest fashions.

Question Number : 46 Question Id : 750782876 Is Question Mandatory : No Calculator : None Response Time : N.A Think Time : N.A Minimum Instruction Time : 0

Wrong Marks : 0.25

The passage is most probably about

- a. Business partnership
- b. Friendship
- c. Tailoring

Options :

1. a only
2. b and c only
3. a and c only
4. a, b and c

Question Number : 47 Question Id : 750782877 Is Question Mandatory : No Calculator : None Response Time : N.A Think Time : N.A Minimum Instruction Time : 0 Wrong Marks : 0.25

What was the contribution of Nurya to the change in the narrator's life ?

Options :

1. Taking the narrator to hotels
2. Introducing the narrator to the world of latest fashions
3. Giving the narrator loan for business
4. Stitching the narrator's cloths

Question Number : 48 Question Id : 750782878 Is Question Mandatory : No Calculator : None Response Time : N.A Think Time : N.A Minimum Instruction Time : 0 Wrong Marks : 0.25

Why did the speaker's father not give him pocket money ?

Options :

1. Because the speaker was employed.
2. Because the father was saving money for the speaker's future.
3. Because the father thought that money spoils children.
4. Because the father was poor.

Question Number : 49 Question Id : 750782879 Is Question Mandatory : No Calculator : None Response Time : N.A Think Time : N.A Minimum Instruction Time : 0 Wrong Marks : 0.25

How much money did Nurya charge from the speaker for altering his shirt ?

Options :

1. Ten rupees
2. Fifty rupees

3. Hundred rupees

4. No money

Question Number : 50 Question Id : 750782880 Is Question Mandatory : No Calculator : None Response Time : N.A Think Time : N.A
Minimum Instruction Time : 0

Wrong Marks : 0.25

Match the following :

a. Loose shirts	I. Shop
b. Swaroop Shet	II. Father's instruction
c. Udhav Shet's hotel	III. Buttons
d. Glossy black nylon	IV. Bhajiyas

Options :

1.

a	b	c	d
I	II	IV	III

2.

a	b	c	d
II	I	IV	III

3.

a	b	c	d
IV	II	III	I

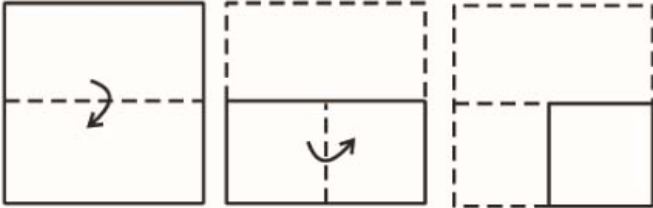
4.

a	b	c	d
III	I	IV	II

Question Number : 51 Question Id : 750782881 Is Question Mandatory : No Calculator : None Response Time : N.A Think Time : N.A
Minimum Instruction Time : 0

Wrong Marks : 0.25

Choose the final alternative punched square paper sheet fold that would most closely resemble the unfolded form given below :



Options :



Question Number : 52 Question Id : 750782882 Is Question Mandatory : No Calculator : None Response Time : N.A Think Time : N.A Minimum Instruction Time : 0

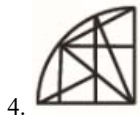
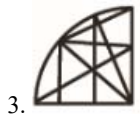
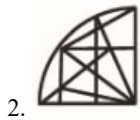
Wrong Marks : 0.25

Choose the image for completing the pattern shown by (a).



Options :

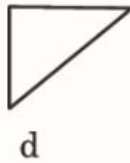
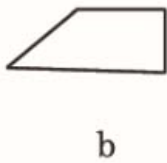
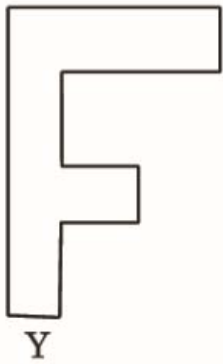




Question Number : 53 Question Id : 750782883 Is Question Mandatory : No Calculator : None Response Time : N.A Think Time : N.A Minimum Instruction Time : 0

Wrong Marks : 0.25

Choose group of four pieces from alternatives that when fitted into each other form the shape shown by figure Y.



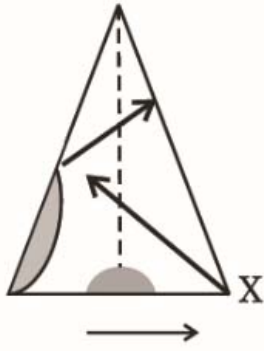
Options :

1. a, b, d, e
2. a, b, c, d
3. b, d, c, e
4. a, b, c, e

Question Number : 54 Question Id : 750782884 Is Question Mandatory : No Calculator : None Response Time : N.A Think Time : N.A Minimum Instruction Time : 0

Wrong Marks : 0.25

X is an image drawn on transparent paper with opaque colour. If the paper is folded along dotted line in a given direction. Which of the option would be like it ?



Options :



1.



2.



3.



4.

Question Number : 55 Question Id : 750782885 Is Question Mandatory : No Calculator : None Response Time : N.A Think Time : N.A
Minimum Instruction Time : 0

Wrong Marks : 0.25

Find the value of x, $x = \sqrt[5]{(32)^4}$.

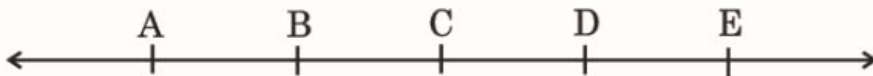
Options :

1. 16
2. 25
3. 21
4. 10

Question Number : 56 Question Id : 750782886 Is Question Mandatory : No Calculator : None Response Time : N.A Think Time : N.A
Minimum Instruction Time : 0

Wrong Marks : 0.25

How many line segments are there in the following figure ?



Options :

1. 6
2. 4
3. 10
4. 8

Question Number : 57 Question Id : 750782887 Is Question Mandatory : No Calculator : None Response Time : N.A Think Time : N.A
Minimum Instruction Time : 0

Wrong Marks : 0.25

If > denotes +, + denotes ÷, < denotes −, − denotes =, = denotes <, × denotes >, find which of the following is correct statement.

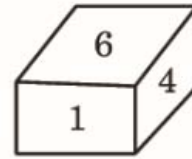
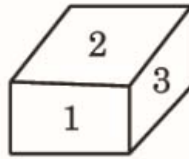
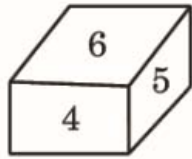
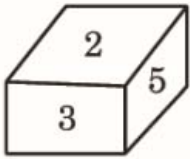
Options :

1. $3 + 2 > 4 = 9 + 3 < 2$
2. $3 > 2 > 4 = 18 + 3 < 1$
3. $3 > 2 < 4 \times 8 + 4 < 2$
4. $3 + 2 < 4 \times 9 + 3 < 3$

Question Number : 58 Question Id : 750782888 Is Question Mandatory : No Calculator : None Response Time : N.A Think Time : N.A Minimum Instruction Time : 0

Wrong Marks : 0.25

Which digit should occur on the opposite face of 2 ?



Options :

1. 1
2. 5
3. 4
4. 6

Question Number : 59 Question Id : 750782889 Is Question Mandatory : No Calculator : None Response Time : N.A Think Time : N.A Minimum Instruction Time : 0

Wrong Marks : 0.25

If $a * b = a^2 + b^2 - ab$, then $9 * 11 = ?$

Options :

1. 99
2. 100
3. 102
4. 103

Question Number : 60 Question Id : 750782890 Is Question Mandatory : No Calculator : None Response Time : N.A Think Time : N.A Minimum Instruction Time : 0

Wrong Marks : 0.25

Complete the following number series.

1, 2, 3, 6, 9, 18, (?), 54.

Options :

1. 18
2. 36
3. 27
4. 81

Question Number : 61 Question Id : 750782891 Is Question Mandatory : No Calculator : None Response Time : N.A Think Time : N.A Minimum Instruction Time : 0

Wrong Marks : 0.25

If 'tee see pee' means 'drink fruit juice',
'see kee lee' means 'juice is sweet' and
'lee ree mee' means 'he is intelligent',
which word in that language mean 'sweet' ?

Options :

1. see
2. kee
3. lee
4. pee

Question Number : 62 Question Id : 750782892 Is Question Mandatory : No Calculator : None Response Time : N.A Think Time : N.A Minimum Instruction Time : 0

Wrong Marks : 0.25

In an election a candidate secures 35% votes and is defeated by the other candidate by a margin of 450 votes. Find the total number of votes.

Options :

1. 1500
2. 1550
3. 1000
4. 850

Question Number : 63 Question Id : 750782893 Is Question Mandatory : No Calculator : None Response Time : N.A Think Time : N.A Minimum Instruction Time : 0

Wrong Marks : 0.25

A man perform $\frac{1}{2}$ of the total journey by bus, $\frac{1}{3}$ of journey by rickshaw and remaining 2 km by foot. How much is his total journey ?

Options :

1. 12 km
2. 8 km
3. 18 km

4. 10 km

Question Number : 64 Question Id : 750782894 Is Question Mandatory : No Calculator : None Response Time : N.A Think Time : N.A
Minimum Instruction Time : 0
Wrong Marks : 0.25

Nina's present age is $83\frac{1}{3}$ % of what it will be after 10 years. What is her present age ?

Options :

1. 76
2. 60
3. 56
4. 40

Question Number : 65 Question Id : 750782895 Is Question Mandatory : No Calculator : None Response Time : N.A Think Time : N.A
Minimum Instruction Time : 0
Wrong Marks : 0.25

A car manufacturing plant manufactures 96 dozens of cars in eight days. How many dozen cars will the plant manufacture in 17 days ?

Options :

1. 210
2. 204
3. 209
4. 224

Question Number : 66 Question Id : 750782896 Is Question Mandatory : No Calculator : None Response Time : N.A Think Time : N.A
Minimum Instruction Time : 0
Wrong Marks : 0.25

In a code language the number "15789" is written as "AXBTC" and the number "2346" is written as "MPDU". Then how to write the number "23549" using same code language ?

Options :

1. MPXDI
2. MPXDC
3. MPADC

4. UKXBC

Question Number : 67 Question Id : 750782897 Is Question Mandatory : No Calculator : None Response Time : N.A Think Time : N.A
Minimum Instruction Time : 0
Wrong Marks : 0.25

Which of the following word will come second in the English dictionary ?

Options :

1. Magical
2. Magnetic
3. Maternal
4. Magnify

Question Number : 68 Question Id : 750782898 Is Question Mandatory : No Calculator : None Response Time : N.A Think Time : N.A
Minimum Instruction Time : 0
Wrong Marks : 0.25

Which is the one that does not belong to that group ?

PURPLE, PINK, GREY, BLUE

Options :

1. Purple
2. Pink
3. Grey
4. Blue

Question Number : 69 Question Id : 750782899 Is Question Mandatory : No Calculator : None Response Time : N.A Think Time : N.A
Minimum Instruction Time : 0
Wrong Marks : 0.25

Read the following information carefully and answer the question.

- (a) A is not a hill station.
- (b) B and E are not historical places.
- (c) D is not an industrial city.
- (d) A and D are not historical cities.
- (e) A and B are not alike.

Which of two cities are neither historical place nor industrial cities ?

Options :

1. A and B
2. D and E
3. E and C
4. B and D

Question Number : 70 Question Id : 750782900 Is Question Mandatory : No Calculator : None Response Time : N.A Think Time : N.A
Minimum Instruction Time : 0
Wrong Marks : 0.25

Complete the following letter series.

ab _ _ _ b _ bbaa _

Options :

1. abaab
2. abbab
3. baaab
4. babba

Question Number : 71 Question Id : 750782901 Is Question Mandatory : No Calculator : None Response Time : N.A Think Time : N.A
Minimum Instruction Time : 0
Wrong Marks : 0.25

One meaningful word is formed from the first, second, fourth and fifth letters of spelling 'FALSEHOOD'. Which is the third letter from the right of the spelling of that word ?

Options :

1. F
2. A
3. E
4. S

Question Number : 72 Question Id : 750782902 Is Question Mandatory : No Calculator : None Response Time : N.A Think Time : N.A
Minimum Instruction Time : 0
Wrong Marks : 0.25

Choose the option that fits logically in the following group.

arch, column, stairs, _____

Options :

1. church
2. bridge
3. edifice
4. pilaster

Question Number : 73 Question Id : 750782903 Is Question Mandatory : No Calculator : None Response Time : N.A Think Time : N.A Minimum Instruction Time : 0

Wrong Marks : 0.25

How many meaningful English words can be formed with letters PCYO using all the letters but each letter only once in each word ?

Options :

1. None
2. One
3. Two
4. Three

Question Number : 74 Question Id : 750782904 Is Question Mandatory : No Calculator : None Response Time : N.A Think Time : N.A Minimum Instruction Time : 0

Wrong Marks : 0.25

On a planet the code terms for earth, water, light, air and sky are sky, light, air, water and earth respectively. If some one is thirsty there, what would he drink ?

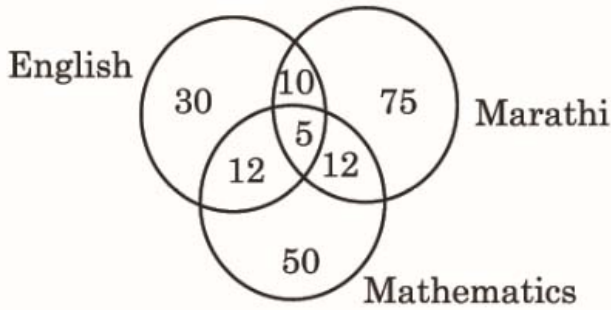
Options :

1. Light
2. Air
3. Sky
4. Water

Question Number : 75 Question Id : 750782905 Is Question Mandatory : No Calculator : None Response Time : N.A Think Time : N.A Minimum Instruction Time : 0

Wrong Marks : 0.25

Five hundred candidates appeared in an examination comprising English, Marathi and Mathematics subjects. The following diagram gives the number of candidates who failed in different subjects.



What is percentage of candidates who failed in at least two subjects ?

Options :

1. 0.078
2. 1.0
3. 6.8
4. 7.8

Question Number : 76 Question Id : 750782906 Is Question Mandatory : No Calculator : None Response Time : N.A Think Time : N.A Minimum Instruction Time : 0

Wrong Marks : 0.25

Which number will replace the question mark ?

9	64	72
17	169	221
19	?	323

Options :

1. 256
2. 289
3. 290
4. 225

Question Number : 77 Question Id : 750782907 Is Question Mandatory : No Calculator : None Response Time : N.A Think Time : N.A Minimum Instruction Time : 0

Wrong Marks : 0.25

Below is given a statement followed by two assumptions numbered I and II. You have to consider the statement and assumptions and decide which of the assumption is implicit in the statement ?

Statement : It is desirable to put child in school when it is 6 years old.

Assumptions : I) The schools do not admit children unless they are six years old.

II) Child at this age is ready to get socialised with a group of children who are from different families.

Options :

1. Only assumption I is implicit
2. Only assumption II is implicit
3. Either I or II is implicit
4. Both I and II are implicit

Question Number : 78 Question Id : 750782908 Is Question Mandatory : No Calculator : None Response Time : N.A Think Time : N.A Minimum Instruction Time : 0

Wrong Marks : 0.25

In a family there are grandmother, husband and wife, two sons and two daughters. All ladies were invited to family function and each one of them has accepted some important responsibility in the function. Both sons went out to play a match.

Who is at home ?

Which of the following is the appropriate logical answer with respect to information given ?

Options :

1. Only grandmother is at home as she is too old
2. Only wife is at home to take care of her sons
3. Only husband is at home to take care of sons
4. None of the lady is at home

Question Number : 79 Question Id : 750782909 Is Question Mandatory : No Calculator : None Response Time : N.A Think Time : N.A Minimum Instruction Time : 0

Wrong Marks : 0.25

Five workers complete one job in ten days. How many days will be required to complete the same job by ten workers ?

Options :

1. 10
2. 5
3. 15
4. 1

Question Number : 80 Question Id : 750782910 Is Question Mandatory : No Calculator : None Response Time : N.A Think Time : N.A Minimum Instruction Time : 0

Wrong Marks : 0.25

Both A and B completes a work in 4 days. If A complete the said work in 12 days, then how many days will take by B to complete the same work ?

Options :

1. 6
2. 8
3. $6\frac{2}{3}$
4. $8\frac{1}{3}$

Question Number : 81 Question Id : 750782911 Is Question Mandatory : No Calculator : None Response Time : N.A Think Time : N.A Minimum Instruction Time : 0

Wrong Marks : 0.25

A man walks 30 m towards South. Then turning to his right he walks 30 m. Then turning to his left, he walks 20 m. Again he turns to his left and walks 30 m. How far he is from his initial position ?

Options :

1. 20 m
2. 30 m
3. 60 m
4. 50 m

Question Number : 82 Question Id : 750782912 Is Question Mandatory : No Calculator : None Response Time : N.A Think Time : N.A Minimum Instruction Time : 0

Wrong Marks : 0.25

Neeta put her wrist watch on the table at 6 a.m. and that time hour hand was aligned to East. In which direction the minute hand will point at 9.15 p.m. ?

Options :

1. North
2. East
3. South
4. West

Question Number : 83 Question Id : 750782913 Is Question Mandatory : No Calculator : None Response Time : N.A Think Time : N.A Minimum Instruction Time : 0

Wrong Marks : 0.25

'Thermometer' is related to 'Temperature' in same way as 'Hygrometer' is related to

Options :

1. Strain
2. Humidity
3. Pressure
4. Density

Question Number : 84 Question Id : 750782914 Is Question Mandatory : No Calculator : None Response Time : N.A Think Time : N.A Minimum Instruction Time : 0

Wrong Marks : 0.25

Given that, A is the mother of B, C is the son of A, D is the brother of E, E is the daughter of B. Who is the grandmother of D ?

Options :

1. A
2. B
3. C
4. E

Question Number : 85 Question Id : 750782915 Is Question Mandatory : No Calculator : None Response Time : N.A Think Time : N.A Minimum Instruction Time : 0

Wrong Marks : 0.25

The ratio of present age of Seeta and Geeta is 7 : 9. Three years ago their ages were in the ratio 3 : 4. What is the present age of Seeta ?

Options :

1. 21 Years
2. 28 Years
3. 27 Years
4. 36 Years

Question Number : 86 Question Id : 750782916 Is Question Mandatory : No Calculator : None Response Time : N.A Think Time : N.A Minimum Instruction Time : 0

Wrong Marks : 0.25

During one year the population of village increases by 5% and next year it diminishes by 5%. If at the end of second year the population was 35,112, what was it at the beginning of first year ?

Options :

1. 35,100
2. 35,200
3. 35,204
4. 35,300

Question Number : 87 Question Id : 750782917 Is Question Mandatory : No Calculator : None Response Time : N.A Think Time : N.A Minimum Instruction Time : 0

Wrong Marks : 0.25

Three friends decided to run a summer library for their friends using their personal collection of books. "A" contributed $\frac{2}{3}$ as many as B's books and "B" contributed $\frac{1}{2}$ as many as C's books. What fraction of books are contributed by "B" ?

Options :

1. $\frac{1}{3}$
2. $\frac{3}{11}$

3. $\frac{12}{13}$

4. $\frac{6}{8}$

Question Number : 88 Question Id : 750782918 Is Question Mandatory : No Calculator : None Response Time : N.A Think Time : N.A Minimum Instruction Time : 0

Wrong Marks : 0.25

What should be the simple interest rate for getting the amount ₹ 2,000 after two years on ₹ 1,600 ?

Options :

1. 1.25

2. 5.12

3. 125

4. 12.5

Question Number : 89 Question Id : 750782919 Is Question Mandatory : No Calculator : None Response Time : N.A Think Time : N.A Minimum Instruction Time : 0

Wrong Marks : 0.25

Find out the odd number in following series.

23, 47, 81, 119

Options :

1. 23

2. 47

3. 81

4. 119

Question Number : 90 Question Id : 750782920 Is Question Mandatory : No Calculator : None Response Time : N.A Think Time : N.A Minimum Instruction Time : 0

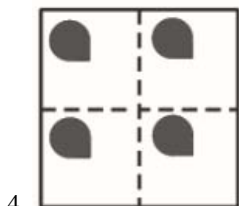
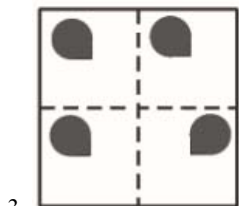
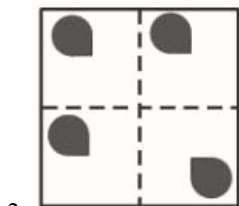
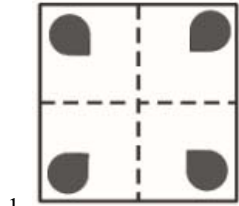
Wrong Marks : 0.25

Choose the alternative, transparent paper sheet that would look like image shown by (a) when folded along dotted lines.



(a)

Options :



Question Number : 91 Question Id : 750782921 Is Question Mandatory : No Calculator : None Response Time : N.A Think Time : N.A Minimum Instruction Time : 0

Wrong Marks : 0.25

Read the following information and answer the question.

Six friends A, B, C, D, E and F are sitting in a closed circle facing the centre. E is to the left of D. C is between A and B. F is between E and A. Who is to the left of B ?

Options :

1. A

2. C

3. D

4. E

Question Number : 92 Question Id : 750782922 Is Question Mandatory : No Calculator : None Response Time : N.A Think Time : N.A
Minimum Instruction Time : 0

Wrong Marks : 0.25

A, B, C, D and E read a newspaper. The one who reads first gives it to C. The one who reads last had taken from A. E was not the first or last to read. There are two readers between B and A. Who reads the newspaper last ?

Options :

1. A

2. B

3. C

4. D

Question Number : 93 Question Id : 750782923 Is Question Mandatory : No Calculator : None Response Time : N.A Think Time : N.A
Minimum Instruction Time : 0

Wrong Marks : 0.25

In a Chess tournament each of six player will play every other player exactly once. How many matches will be played during the tournament ?

Options :

1. 12

2. 15

3. 30

4. 36

Question Number : 94 Question Id : 750782924 Is Question Mandatory : No Calculator : None Response Time : N.A Think Time : N.A
Minimum Instruction Time : 0

Wrong Marks : 0.25

In order to be declared as pass in an examination, a student is required to get 280 marks out of the aggregate marks. Hema got 264 marks and declared fail by 2 percent. What is the minimum passing percentage of the examination ?

Options :

1. 33%

2. 35%

3. 40%

4. 45%

Question Number : 95 Question Id : 750782925 Is Question Mandatory : No Calculator : None Response Time : N.A Think Time : N.A Minimum Instruction Time : 0

Wrong Marks : 0.25

The numbers/alphabets in the following question are written according to certain pattern row-wise or column-wise. Identify the pattern and find the missing number/ alphabet accordingly.

2A	9C	3B
12C	?	12B
6B	9A	4C

Options :

1. 18A

2. 12A

3. 18B

4. 81A

Question Number : 96 Question Id : 750782926 Is Question Mandatory : No Calculator : None Response Time : N.A Think Time : N.A Minimum Instruction Time : 0

Wrong Marks : 0.25

When I asked how many flowers she had in her bag, Nani replied that there are all roses but ten, all carnations but ten and all zinias but ten.

Choose the option that describes correct number of all flowers.

Options :

1. 30

2. 20

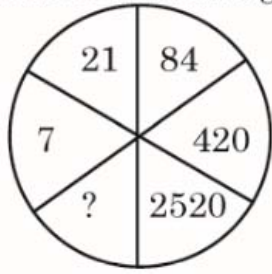
3. 15

4. 10

Question Number : 97 Question Id : 750782927 Is Question Mandatory : No Calculator : None Response Time : N.A Think Time : N.A Minimum Instruction Time : 0

Wrong Marks : 0.25

Find the missing number from amongst the given alternatives.



Options :

1. 3620
2. 5040
3. 17640
4. 18960

Question Number : 98 Question Id : 750782928 Is Question Mandatory : No Calculator : None Response Time : N.A Think Time : N.A Minimum Instruction Time : 0

Wrong Marks : 0.25

How many 8's are there in the following number series which are exactly divisible by its immediately preceding and also divisible by immediately succeeding numbers ?
824517284842282698454832843183

Options :

1. 1
2. 2
3. 3
4. 4

Question Number : 99 Question Id : 750782929 Is Question Mandatory : No Calculator : None Response Time : N.A Think Time : N.A Minimum Instruction Time : 0

Wrong Marks : 0.25

Find out the missing number in the following series.
-4, 7, 29, 62, ?

Options :

1. 95
2. 106
3. 62

Question Number : 100 Question Id : 750782930 Is Question Mandatory : No Calculator : None Response Time : N.A Think Time : N.A Minimum Instruction Time : 0

Wrong Marks : 0.25

By walking $\frac{2}{5}$ of his usual speed a student reaches his school 30 minutes late. Find his usual time.

Options :

1. 10 minutes
2. 30 minutes
3. 20 minutes
4. 12 minutes